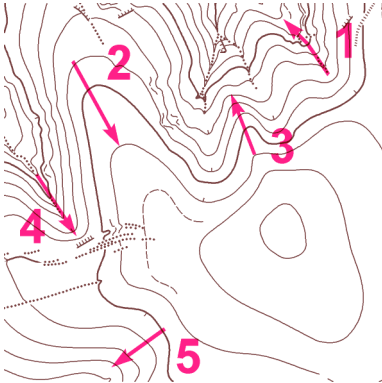


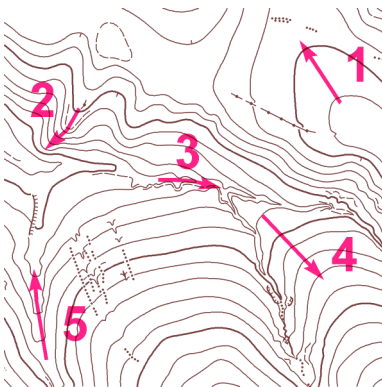
MAPOVÁ TEORIE - TJ Slovan Luhačovice - UH-S1

Mára


V tabulce vyplň, zda šipka označuje hřbet (H) nebo údolí (U); označ šipkami \uparrow , \downarrow - stoupání nebo klesání:



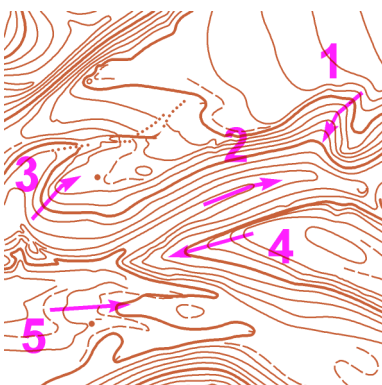
	1	2	3	4	5
H/U					
\uparrow/\downarrow					



	1	2	3	4	5
H/U					
\uparrow/\downarrow					



	1	2	3	4	5
H/U					
\uparrow/\downarrow					



	1	2	3	4	5
H/U					
\uparrow/\downarrow					