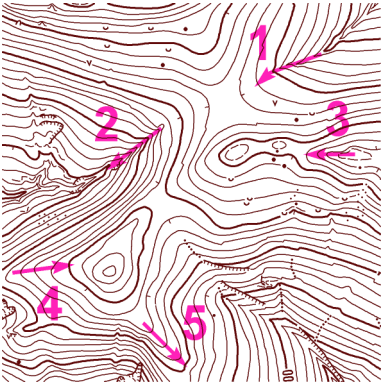



MAPOVÁ TEORIE - TJ Slovan Luhačovice - UH-S2

Mára

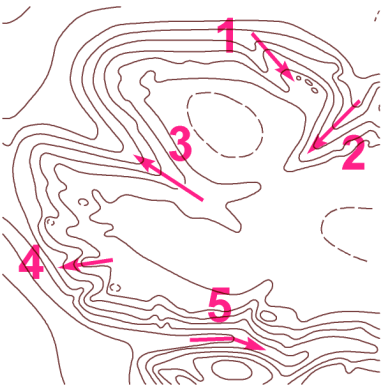
V tabulce vyplň, zda šipka označuje hřbet (H) nebo údolí (U); označ šipkami \uparrow , \downarrow - stoupání nebo klesání:



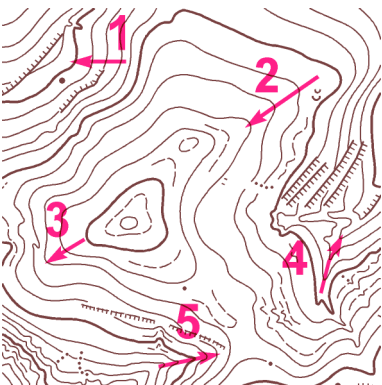
	1	2	3	4	5
H / U					
\uparrow / \downarrow					



	1	2	3	4	5
H / U					
\uparrow / \downarrow					



	1	2	3	4	5
H / U					
\uparrow / \downarrow					



	1	2	3	4	5
H / U					
\uparrow / \downarrow					